

Fourth Semester B.E. Degree Examination, June/July 2024

Circuits and Controls

Time: 3 hrs.

Max. Marks: 100

Note: Answer any FIVE full questions, choosing ONE full question from each module.

Module-1

- 1 a. With help of circuits explain independent electrical sources. (06 Marks)
- b. Using mesh current analysis, find the currents in various branches and node voltages at 'a' and 'b' points shown in Fig.Q.1(b). (08 Marks)

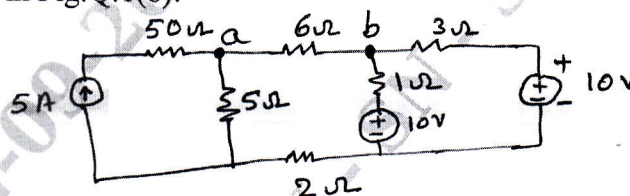


Fig.Q.1(b)

- c. Using mesh current analysis, find the current in $(2 + j3)\Omega$ shown in Fig.Q.1(c).

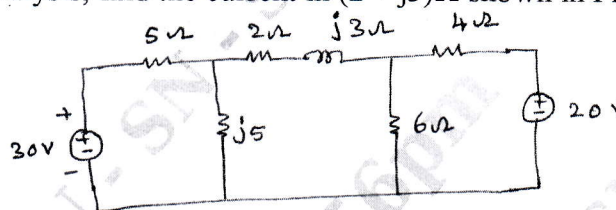


Fig.Q.1(c)

(06 Marks)

OR

- 2 a. State and explain Thevenin's theorem. (08 Marks)
- b. Using nodal analysis, find the node voltages at 'a' and 'b' shown in circuit Fig.Q.2(b).

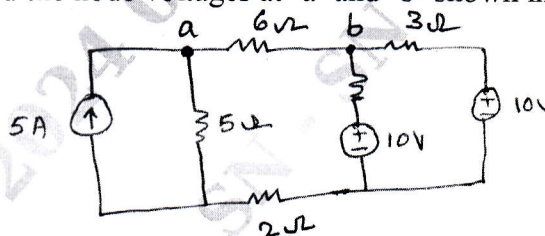


Fig.Q.2(b)

(08 Marks)

- c. Define and explain briefly, the super position theorem. (04 Marks)

Module-2

- 3 a. Find the Z-parameters of given circuit shown in Fig.Q.3(a). (08 Marks)

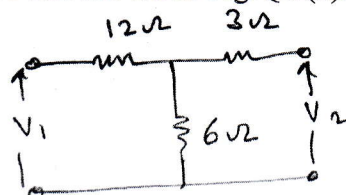


Fig.Q.3(a)

- b. Find the Y-parameters of circuit shown in Fig.Q.3(b).

(08 Marks)

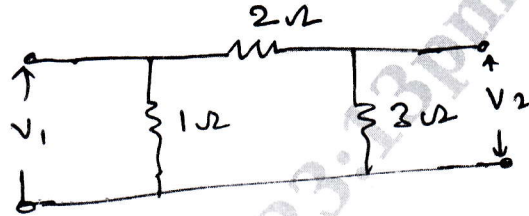


Fig.Q.3(b)

- c. Explain the standard test signals unit step, unit ramp and unit impulse.

(04 Marks)

OR

- 4 a. Define and prove that initial value theorem and final value theorem. (08 Marks)
 b. Find the expression for current when switch 'SW' is closed at $t = 0$ shown in Fig.Q.4(b). (Use Laplace transform). (08 Marks)

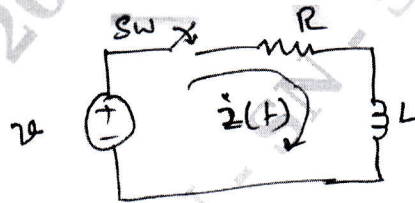


Fig.Q.4(b)

- c. Obtain the Laplace transform of a gate function shown in Fig.Q.4(c).

(04 Marks)

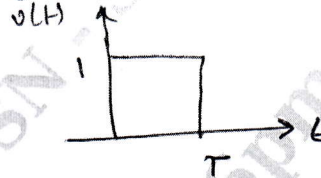


Fig.Q.4(c)

Module-3

- 5 a. What is control system? List the differences between open loop control system and closed loop control system with examples. (10 Marks)
 b. Determine the overall transfer function shown in the Fig.Q.5(b) using block diagram reduction technique. (10 Marks)

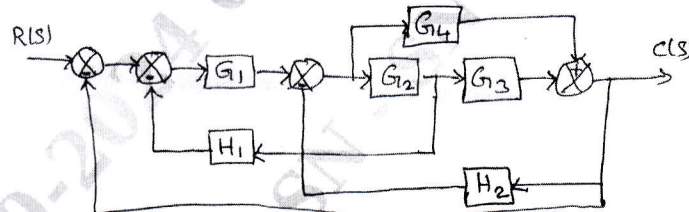


Fig.Q.5(b)

OR

- 6 a. Find the transfer function of the circuit shown in the Fig.Q.6(a).

(10 Marks)

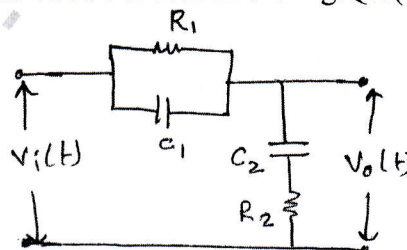
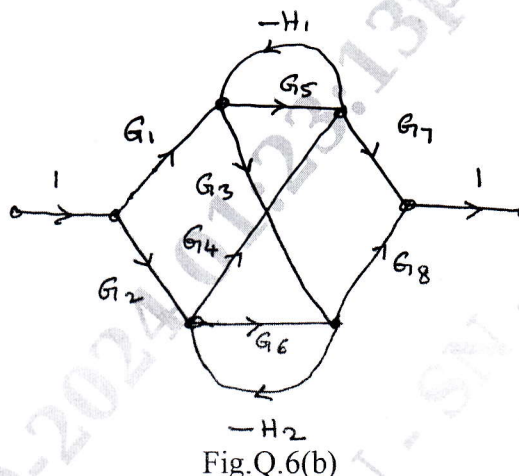


Fig.Q.6(a)

- b. Find the overall gain of the SFG system shown in the Fig.Q.6(b) using Mason's gain formula. (10 Marks)



Module-4

- 7 a. Derive the expression for underdamped second order system with unit step input. (10 Marks)
 b. Discuss the stability of the closed loop system as a function of K for the open loop transfer function using RH criterion.

$$G(S)H(S) = \frac{K(S+1)}{S(S-1)(S^2 + 4S + 16)}$$

(10 Marks)

OR

- 8 a. A vfb system having transfer function $\frac{C(S)}{R(S)} = \frac{2}{S(S^2 + PS + 4K)}$ is marginally stable and oscillates with frequency 2 rad/sec. Find K_{mar} and 'P' using RH criterion. (10 Marks)
 b. Starting from the output equation $C(t)$ derive expressions for: i) Rise time (t_r) ii) Peak overshoot. (10 Marks)

Module-5

- 9 a. Sketch the complete root locus of the system having open loop transfer function $G(S)H(S) = \frac{K}{S(S+1)(S+2)(S+3)}$ and determine values of K for which the system is stable. (16 Marks)
 b. Construct the state model using phase variable if the system is described by the difference equation $\frac{d^3 y(t)}{dt^3} + 4 \frac{d^2 y(t)}{dt^2} + 7 \frac{dy(t)}{dt} + 2y(t) = 5U(t)$ (04 Marks)

OR

- 10 Plot the Bode magnitude and phase diagram for a open loop transfer function $G(S)H(S) = \frac{10(1+0.5S)}{S(1+0.25S)(1+0.2S)}$ (20 Marks)
